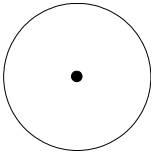
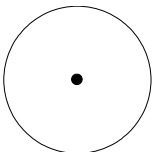
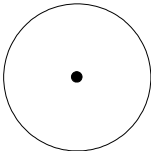
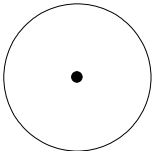
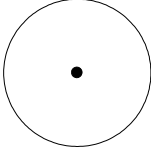
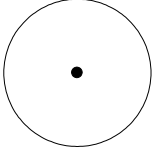
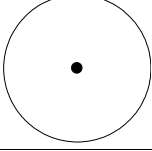
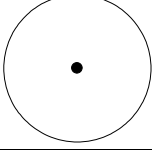
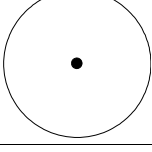
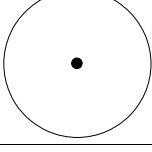
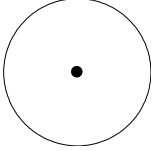
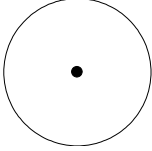
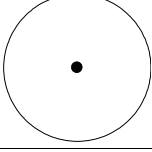
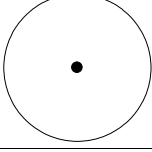
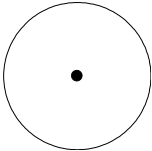
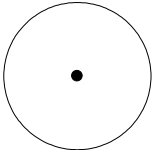
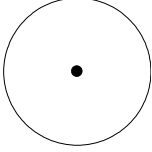
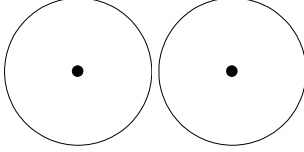
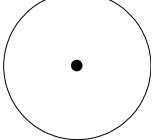


# Fraction Pies

Can you shade in these fractions and percentages?

(a) one half		(k) 75%	
(b) one quarter		(l) 100%	
(c) one third		(m) $\frac{3}{8}$	
(d) $\frac{3}{4}$		(n) 80%	
(e) $\frac{1}{5}$		(o) 35%	
(f) $\frac{2}{4}$		(p) $\frac{4}{7}$	
(g) 50%		(q) 1%	
(h) $\frac{1}{10}$		(r) $\frac{6}{24}$	
(i) $\frac{3}{10}$		(s) $1\frac{1}{2}$	
(j) 60%		(t) 175%	